

Read time: Quarter past




Complete the sentences to identify the times shown on the clocks.



Quarter past 12



Quarter past 8



Quarter past 5



Quarter past 6



Quarter past 2



Quarter past 10



Quarter past 3



Quarter past 11



Quarter past 7



Quarter past 4



Quarter past 9



Quarter past 1

Read time: Quarter to



Complete the sentences to identify the times shown on the clocks.



Quarter to 2



Quarter to 3



Quarter to 4



Quarter to 5



Quarter to 6



Quarter to 7



Quarter to 8



Quarter to 9



Quarter to 10



Quarter to 11



Quarter to 12



Quarter to 1


Quarter to 2

Quarter to 3

Quarter to 4

Read time: Quarter past

Write the times shown on the clocks.



Quarter past 12



Quarter past 8




Quarter past 5



Quarter past 6



Quarter past 2



Quarter past 10



Quarter past 3




Quarter past 11



Quarter past 7



Quarter past 4



Quarter past 9



Quarter past 1

Read time: Quarter to

Write the times shown on the clocks.



Quarter to 2



Quarter to 4



Quarter to 6



Quarter to 5



Quarter to 10



Quarter to 12



Quarter to 11



Quarter to 1



Quarter to 8



Quarter to 9



Quarter to 7



Quarter to 3

Draw time: Quarter past

Draw the times on the clocks.



Quarter past 4



Quarter past 7



Quarter past 2



Quarter past 9



Quarter past 5



Quarter past 8



Quarter past 11



Quarter past 3



Quarter past 10



Quarter past 6



Quarter past 12



Quarter past 1

Draw time: Quarter to

Draw the times on the clocks.



Quarter to 2



Quarter to 5



Quarter to 10



Quarter to 7



Quarter to 11



Quarter to 4



Quarter to 3



Quarter to 1



Quarter to 8



Quarter to 12



Quarter to 9



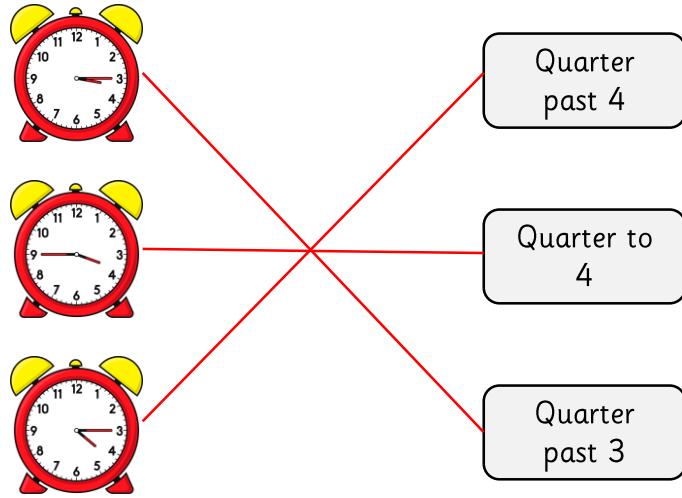
Quarter to 6

Challenge cards




Problem solving and reasoning cards:

Match the clocks to the correct time.



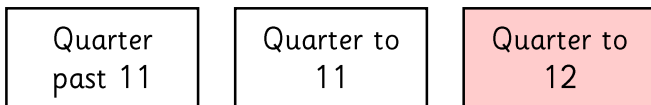
The bus leaves every quarter past the hour and quarter to the hour.



Which buses can Dom get if he catches the bus between the times shown above?

Quarter to 9, quarter past 9, quarter to 10, quarter past 10 and quarter to 11.

Colour the correct time shown.




The time shown is quarter past 3.

Is Jess correct?

Explain how you know.

Yes. The hour hand is a quarter way past the third hour. The minute hand is on 3 meaning 15 minutes past the hour.

The bus leaves every quarter past the hour and quarter to the hour.



There are 4 different buses that can be caught. True or false? Explain your answer.

False. There are three different buses: quarter past 4, quarter to 5, quarter past 5.

What do you notice about the hour hand for a quarter past time?

It is a quarter of the way past the hour.

What do you notice about the hour hand for a quarter to time?

It is a quarter of the way to the next hour or three quarters of the way past the previous hour.