

# Read time: Quarter past



Complete the sentences to identify the times shown on the clocks.



Quarter past \_\_\_\_\_



Quarter past \_\_\_\_\_



Quarter past \_\_\_\_\_



Quarter past \_\_\_\_\_



Quarter past \_\_\_\_\_



Quarter past \_\_\_\_\_



Quarter past \_\_\_\_\_



Quarter past \_\_\_\_\_



Quarter past \_\_\_\_\_



Quarter past \_\_\_\_\_



Quarter past \_\_\_\_\_



Quarter past \_\_\_\_\_

# Read time: Quarter to



Complete the sentences to identify the times shown on the clocks.



Quarter to \_\_\_\_\_



Quarter to \_\_\_\_\_



Quarter to \_\_\_\_\_



Quarter to \_\_\_\_\_



Quarter to \_\_\_\_\_



Quarter to \_\_\_\_\_



Quarter to \_\_\_\_\_



Quarter to \_\_\_\_\_



Quarter to \_\_\_\_\_



Quarter to \_\_\_\_\_





Quarter to \_\_\_\_\_



Quarter to \_\_\_\_\_













# Read time: Quarter past

Write the times shown on the clocks.




# Read time: Quarter to

Write the times shown on the clocks.


		
		
		
		

# Draw time: Quarter past


Draw the times on the clocks.




Quarter past 4




Quarter past 7




Quarter past 2




Quarter past 9




Quarter past 5




Quarter past 8



Quarter past 11




Quarter past 3




Quarter past 10



Quarter past 6



Quarter past 12



Quarter past 1

# Draw time: Quarter to


Draw the times on the clocks.



Quarter to 2




Quarter to 5



Quarter to 10




Quarter to 7



Quarter to 11




Quarter to 4




Quarter to 3




Quarter to 1




Quarter to 8



Quarter to 12



Quarter to 9



Quarter to 6

# Challenge cards



Problem solving and reasoning cards:

Match the clocks to the correct time.



Quarter  
past 4



Quarter to  
4



Quarter  
past 3

The bus leaves every quarter past the hour  
and quarter to the hour.



Which buses can Dom get if he catches the  
bus between the times shown above?

Colour the correct time shown.



Quarter  
past 11

Quarter to  
11

Quarter to  
12



The time shown is  
quarter past 3.

Is Jess correct?  
Explain how you know.

The bus leaves every quarter past the hour  
and quarter to the hour.



What do you notice about the hour hand for  
a quarter past time?

What do you notice about the hour hand for  
a quarter to time?

There are 4 different buses that can be  
caught. True or false? Explain your answer.