













Intervals of 5: Past















Complete the sentences to identify the times shown on the clocks.

		
<u>5</u> past <u>3</u>	<u>20</u> past <u>7</u>	<u>10</u> past <u>11</u>
		
<u>20</u> past <u>9</u>	<u>25</u> past <u>5</u>	<u>5</u> past <u>12</u>
		
<u>5</u> past <u>6</u>	<u>10</u> past <u>8</u>	<u>25</u> past <u>1</u>
		
<u>10</u> past <u>4</u>	<u>25</u> past <u>2</u>	<u>20</u> past <u>10</u>

Intervals of 5: Past



Complete the sentences to identify the times shown on the clocks.

		
<u>10</u> past <u>4</u>	<u>5</u> past <u>1</u>	<u>20</u> past <u>8</u>
		
<u>25</u> past <u>6</u>	<u>10</u> past <u>8</u>	<u>20</u> past <u>12</u>
		
<u>5</u> past <u>4</u>	<u>10</u> past <u>12</u>	<u>25</u> past <u>3</u>
		
<u>20</u> past <u>11</u>	<u>5</u> past <u>2</u>	<u>25</u> past <u>7</u>

Intervals of 5: To



Complete the sentences to identify the times shown on the clocks.



5 to 2



20 to 9



10 to 4



25 to 11



10 to 3



5 to 10



5 to 7




20 to 12



25 to 8



10 to 5



25 to 1



20 to 6

Intervals of 5: To



Complete the sentences to identify the times shown on the clocks.



25 to 1



10 to 3



5 to 7



20 to 9



25 to 10



10 to 6



20 to 6



5 to 8



25 to 11



5 to 11















10 to 5



20 to 1













Intervals of 5: Past

Write the times shown on the clocks.

		
5 past 3	20 past 7	10 past 11
		
20 past 9	25 past 5	5 past 12
		
5 past 6	10 past 8	25 past 1
		
10 past 4	25 past 2	20 past 10













Intervals of 5: Past

Write the times shown on the clocks.

		
10 past 4	5 past 1	20 past 8
		
25 past 6	10 past 8	20 past 12
		
5 past 4	10 past 12	25 past 3
		
20 past 11	5 past 2	25 past 7

Intervals of 5: To

Write the times shown on the clocks.

		
5 to 2	20 to 9	10 to 4
		
25 to 11	10 to 3	5 to 10
		
5 to 7	20 to 12	25 to 8
		
10 to 5	25 to 1	20 to 6

Intervals of 5: To

Write the times shown on the clocks.



25 to 1



10 to 3



5 to 7



20 to 9



25 to 10



10 to 6



20 to 6



5 to 8



25 to 11



5 to 11



10 to 5



20 to 1